


Schreibe die fehlenden Zahlen in die leeren Kästchen.



0		2		4		6		8		10		12		14		16		18		20
---	--	---	--	---	--	---	--	---	--	----	--	----	--	----	--	----	--	----	--	----

A number line with boxes for numbers from 0 to 20. The boxes for 0, 2, 4, 6, 8, 10, 12, 14, 16, 18, and 20 are filled with their respective numbers. The boxes for 1, 3, 5, 7, 9, 11, 13, 15, 17, and 19 are empty. Dotted lines connect the top of each box to a vertical line below it, forming a series of vertical lines that serve as a guide for writing the numbers.



Schreibe die fehlenden Zahlen in die leeren Kästchen.

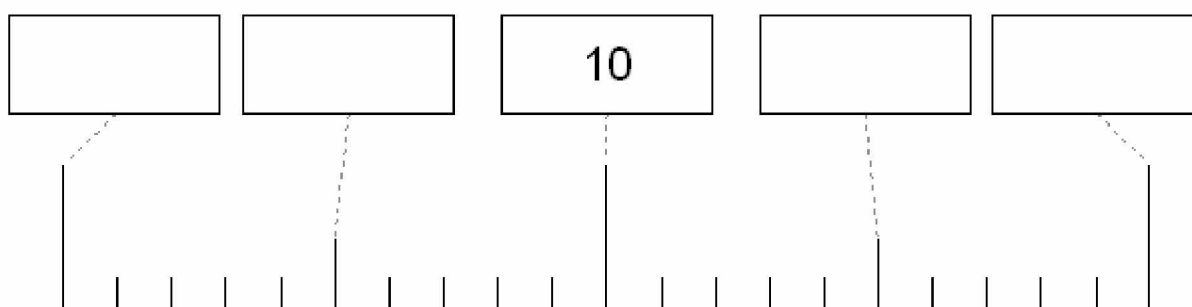
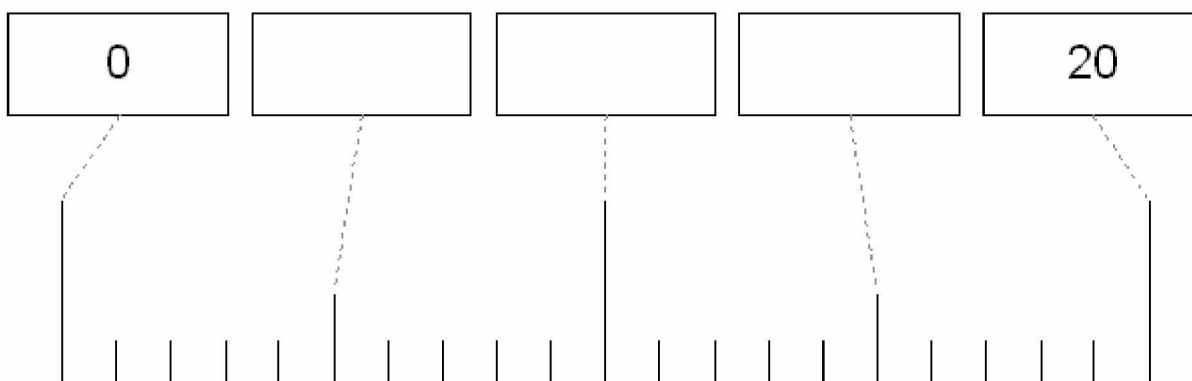
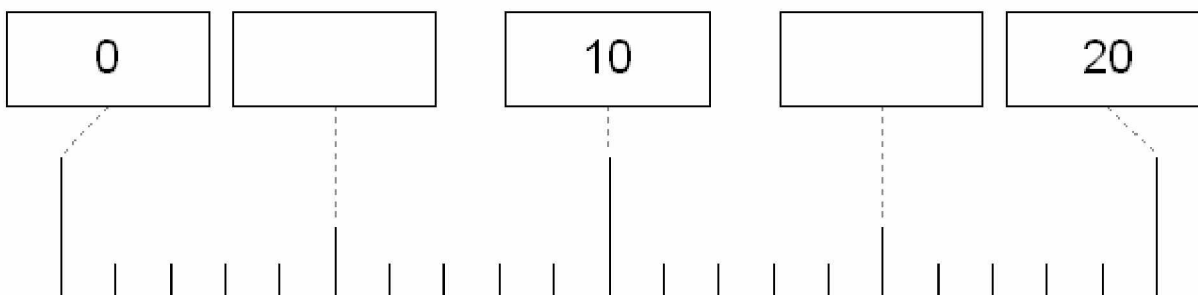


	1		3		5		7		9		11		13		15		17		19	
--	---	--	---	--	---	--	---	--	---	--	----	--	----	--	----	--	----	--	----	--

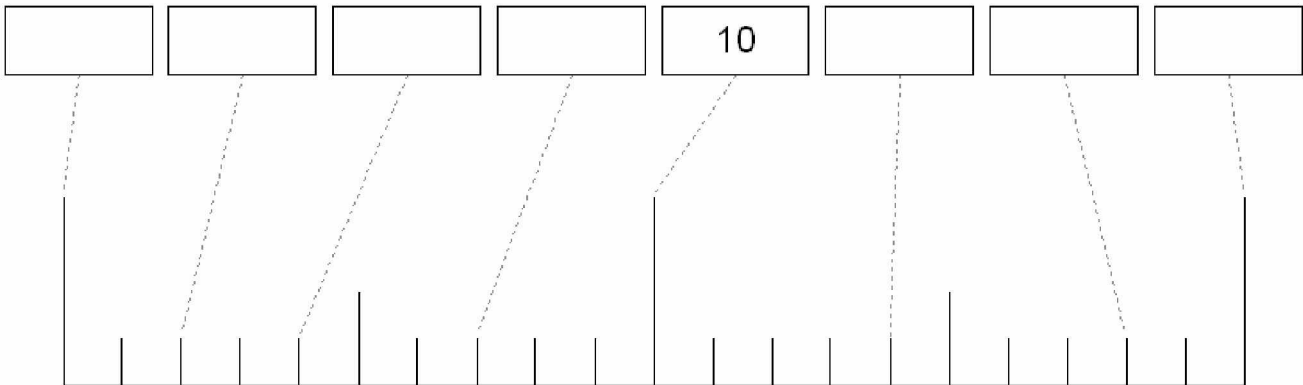
A number line with boxes for numbers from 0 to 20. The boxes for 1, 3, 5, 7, 9, 11, 13, 15, 17, and 19 are filled with their respective numbers. The boxes for 0, 2, 4, 6, 8, 10, 12, 14, 16, 18, and 20 are empty. Dotted lines connect the top of each box to a vertical line below it, forming a series of vertical lines that serve as a guide for writing the numbers.



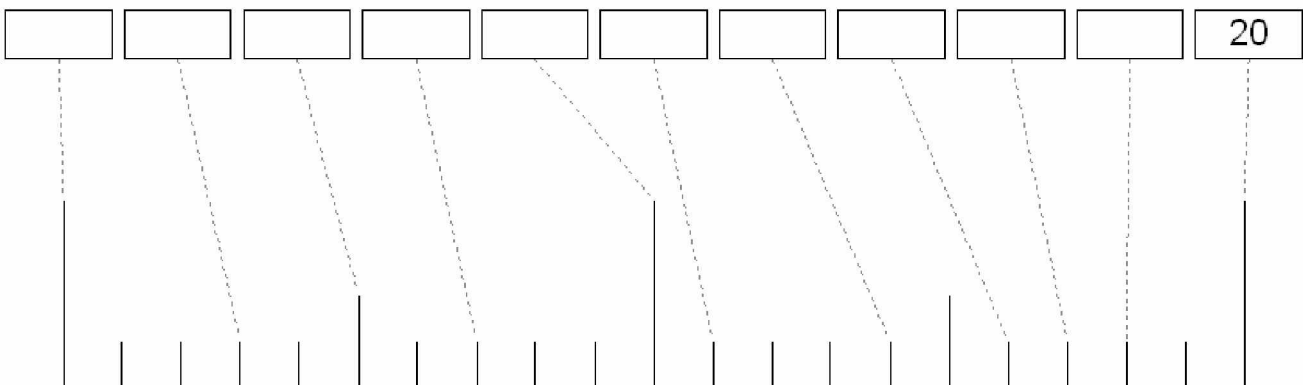
Schreibe die fehlenden Zahlen in die leeren Kästchen.



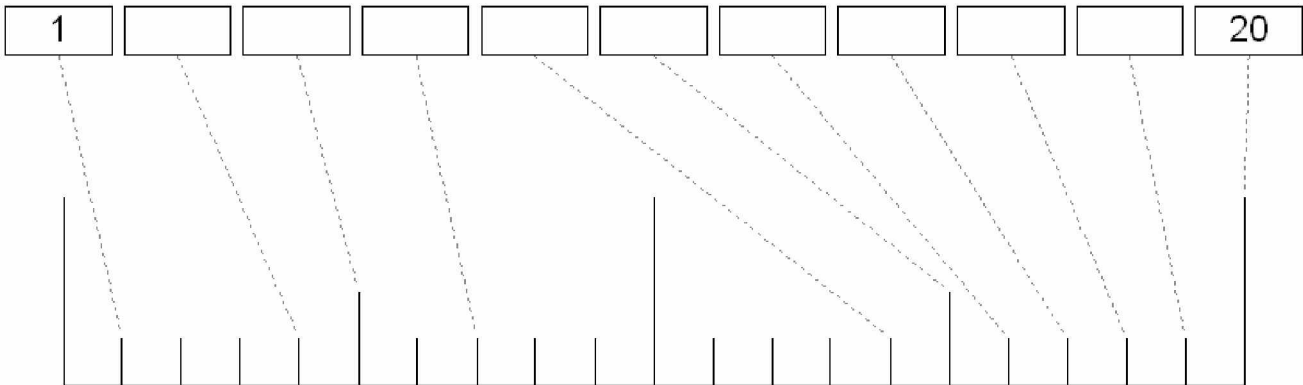
Schreibe die fehlenden Zahlen in die leeren Kästchen.




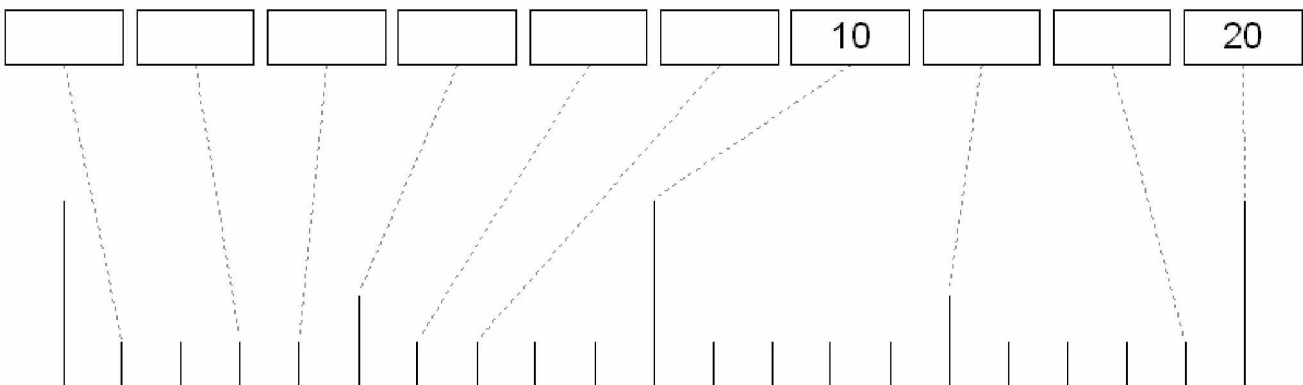
Schreibe die fehlenden Zahlen in die leeren Kästchen.



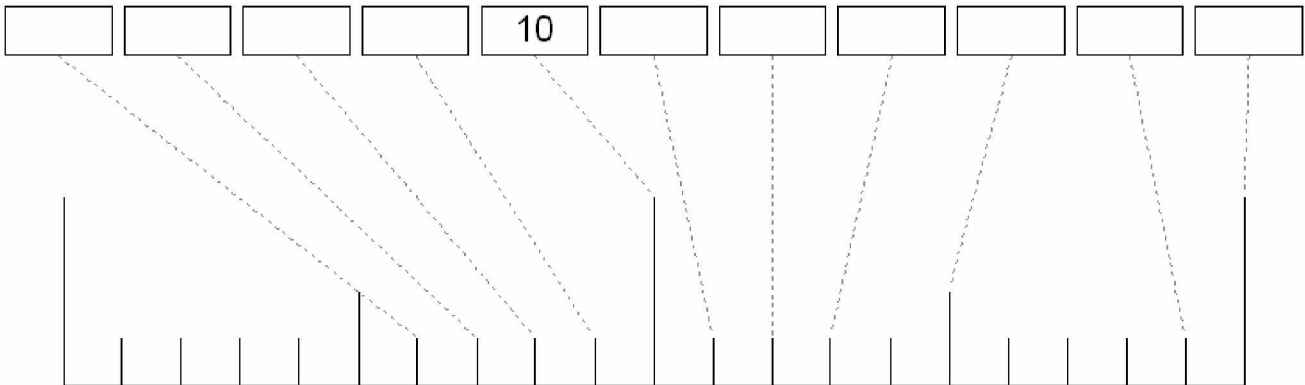
Schreibe die fehlenden Zahlen in die leeren Kästchen.



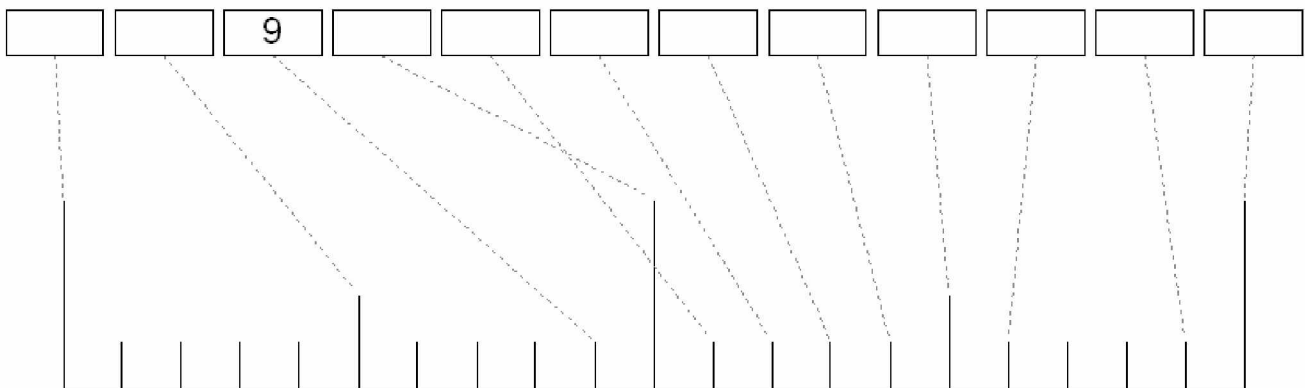
Schreibe die fehlenden Zahlen in die leeren Kästchen.



Schreibe die fehlenden Zahlen in die leeren Kästchen.



Schreibe die fehlenden Zahlen in die leeren Kästchen.



Schreibe die fehlenden Zahlen in die leeren Kästchen.

