

Schreibe die fehlenden Zahlen in die leeren Kästchen.



0			3		5		7	8		10
---	--	--	---	--	---	--	---	---	--	----

A number line with boxes for numbers 0 to 10. The boxes for 0, 3, 5, 7, 8, and 10 are filled. The boxes for 1, 2, 4, 6, and 9 are empty. Dashed lines connect the numbers in the boxes to their corresponding positions on the number line.



0		2		4					9	
---	--	---	--	---	--	--	--	--	---	--

A number line with boxes for numbers 0 to 10. The boxes for 0, 2, 4, and 9 are filled. The boxes for 1, 3, 5, 6, 7, 8, and 10 are empty. Dashed lines connect the numbers in the boxes to their corresponding positions on the number line.



0					5					10
---	--	--	--	--	---	--	--	--	--	----

A number line with boxes for numbers 0 to 10. The boxes for 0, 5, and 10 are filled. The boxes for 1, 2, 3, 4, 6, 7, 8, and 9 are empty. Dashed lines connect the numbers in the boxes to their corresponding positions on the number line.

Schreibe die fehlenden Zahlen in die leeren Kästchen.



0					5		7			10
---	--	--	--	--	---	--	---	--	--	----

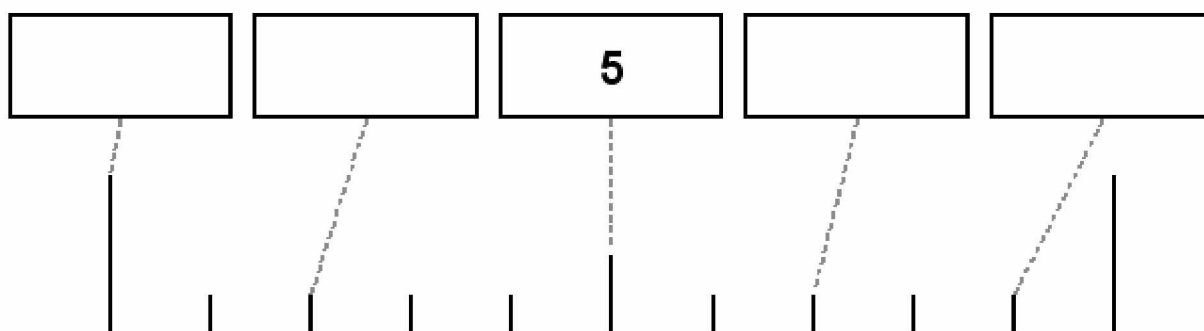
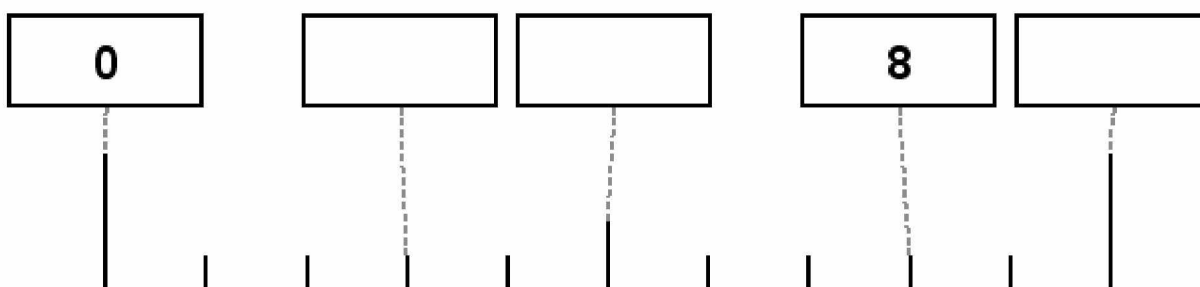
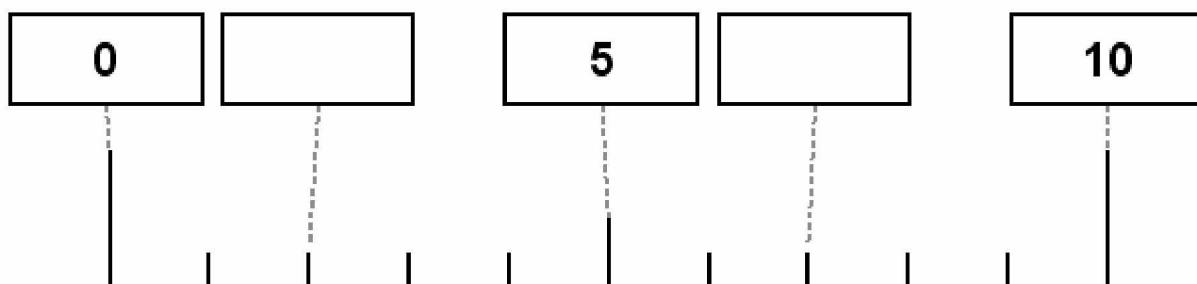


0				4					9	
---	--	--	--	---	--	--	--	--	---	--

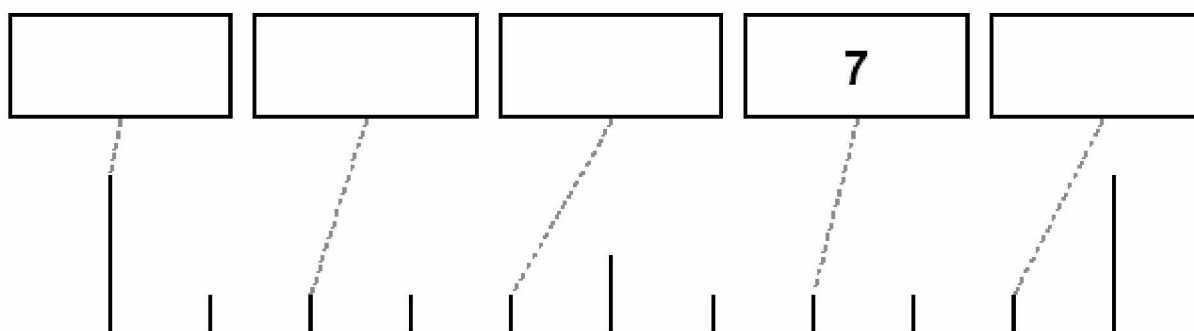
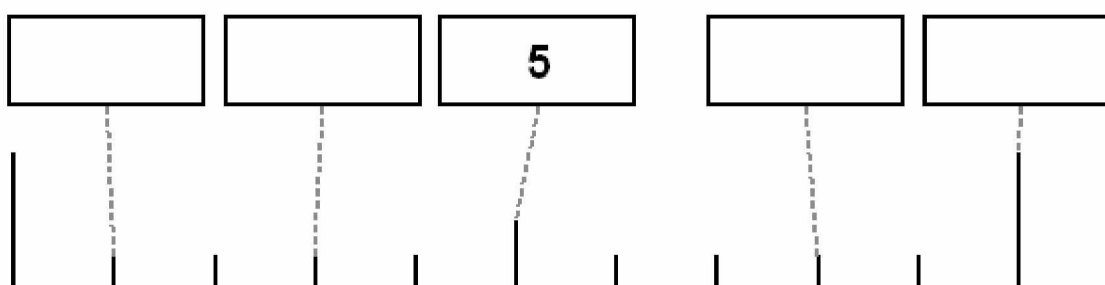
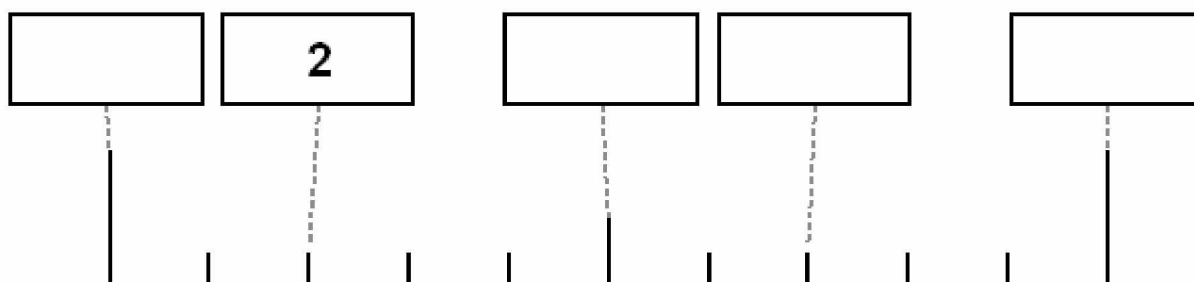


0										10
---	--	--	--	--	--	--	--	--	--	----

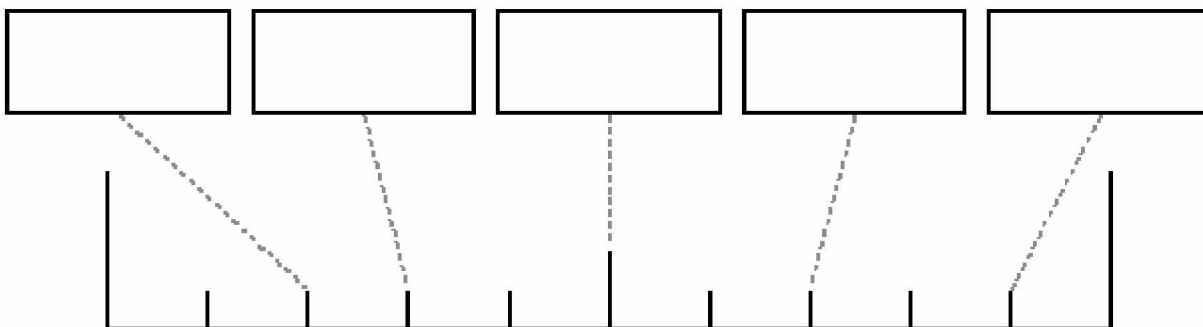
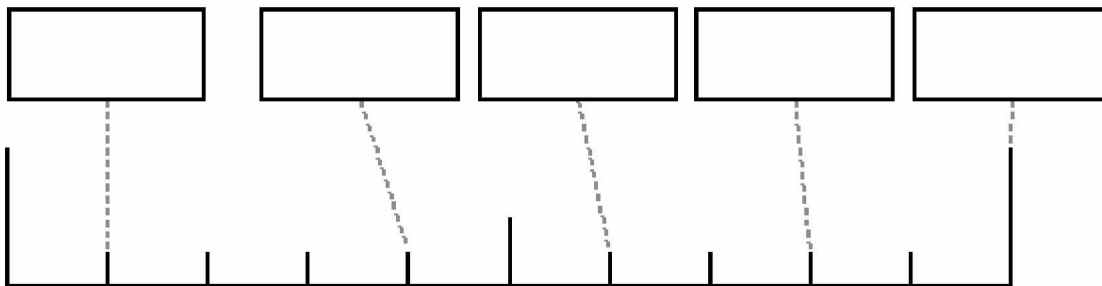
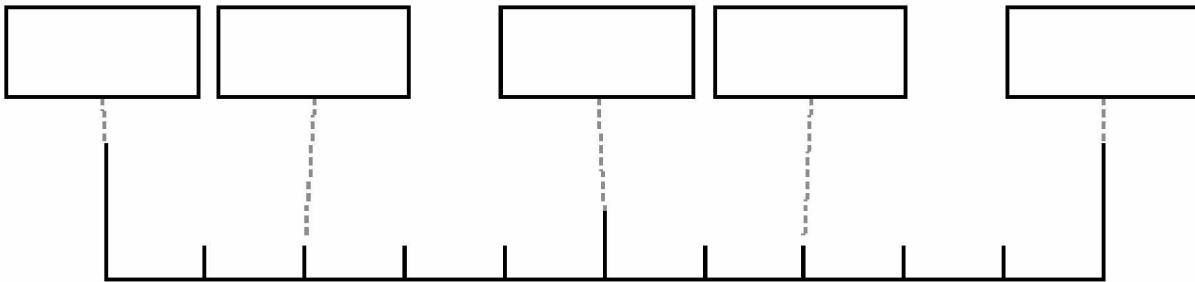
Schreibe die fehlenden Zahlen in die leeren Kästchen.



Schreibe die fehlenden Zahlen in die leeren Kästchen.



Schreibe die fehlenden Zahlen in die leeren Kästchen.



Schreibe die fehlenden Zahlen in die leeren Kästchen.

