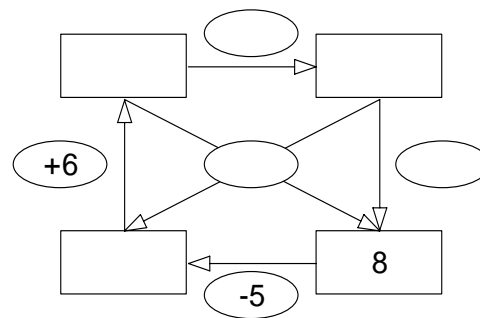
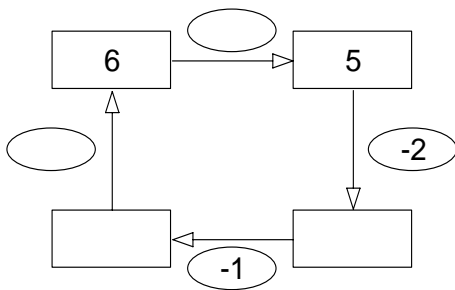

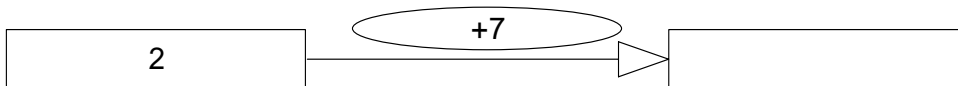
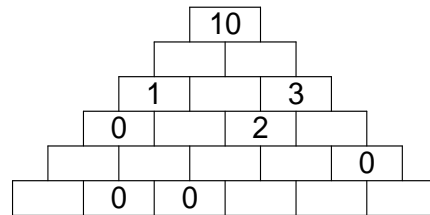
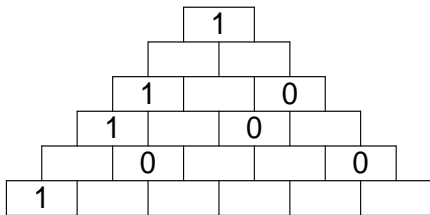
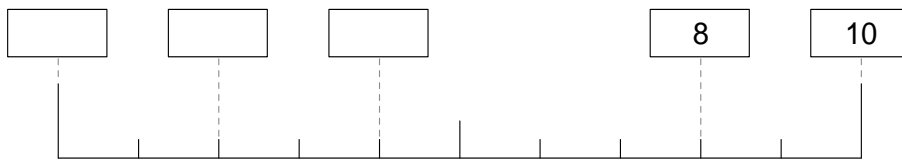


ZR bis 10, Addition u. Subtraktion



7	
3	
4	
1	
6	

9	
8	
0	
6	
3	

In der Vase sind 10 Tulpen, 3 davon sind verwelkt. Du nimmst sie heraus. Wie viele bleiben übrig?

Du hast 7 Luftballons. Dein Freund schenkt dir noch 3. Wie viele hast du jetzt?