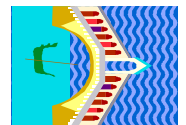
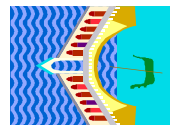
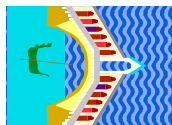







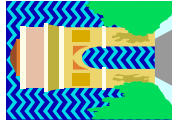
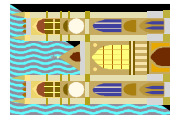
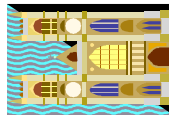
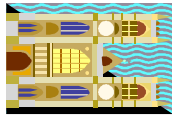









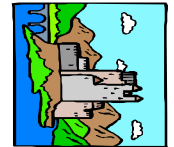



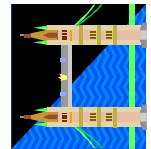
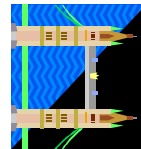
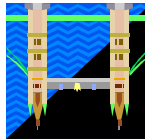
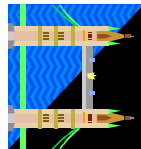
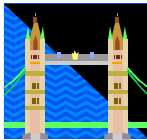


Bekannte europäische Sehenswürdigkeiten

Welche dieser Bilder sind um 90° nach rechts gekippt? Kreise sie ein.



Bekannte britische und amerikanische Sehenswürdigkeiten

Welche dieser Bilder sind um 90° nach rechts gekippt? Kreise sie ein.



Bekannte internationale Sehenswürdigkeiten

Welche dieser Bilder sind um 90° nach rechts gekippt? Kreise sie ein.

