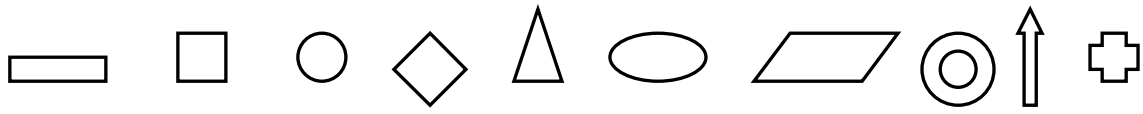


Rätsel - Addition und Subtraktion im ZR 100



1

6

0

$$\text{diamond} + \text{diamond} + \text{rectangle} + \text{oval} = \text{oval} + \text{cross}$$

$$\text{oval} + \text{diamond} - \text{diamond} + \text{oval} = \text{rectangle} + \text{target}$$

$$\text{target} + \text{rectangle} + \text{rectangle} + \text{arrow} = \text{rectangle} + \text{cross} + \text{cross}$$

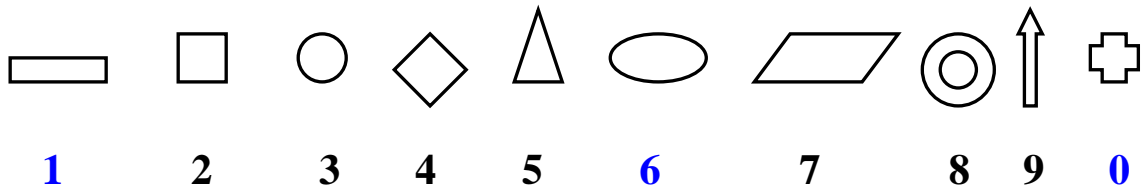
$$\text{arrow} + \text{target} - \text{square} + \text{arrow} = \text{oval} + \text{arrow}$$

$$\text{rectangle} + \text{arrow} + \text{rectangle} + \text{diamond} = \text{circle} + \text{circle}$$

$$\text{target} + \text{target} - \text{oval} - \text{circle} = \text{square} + \text{triangle}$$

$$\text{square} + \text{square} + \text{triangle} + \text{triangle} = \text{parallelogram} + \text{parallelogram}$$

Lösungsblatt: Rätsel - Addition und Subtraktion im ZR 100



$$\begin{array}{r}
 \begin{array}{c} \diamond \quad \diamond \\ 44 \end{array} + \begin{array}{c} \text{rectangle} \quad \text{oval} \\ 16 \end{array} = \begin{array}{c} \text{oval} \quad \text{cross} \\ 60 \end{array}
 \end{array}$$

$$\begin{array}{r}
 \begin{array}{c} \text{oval} \quad \diamond \\ 64 \end{array} - \begin{array}{c} \diamond \quad \text{oval} \\ 46 \end{array} = \begin{array}{c} \text{rectangle} \quad \text{concentric circles} \\ 18 \end{array}
 \end{array}$$

$$\begin{array}{r}
 \begin{array}{c} \text{concentric circles} \quad \text{rectangle} \\ 81 \end{array} + \begin{array}{c} \text{rectangle} \quad \text{arrow} \\ 19 \end{array} = \begin{array}{c} \text{rectangle} \quad \text{cross} \quad \text{cross} \\ 100 \end{array}
 \end{array}$$

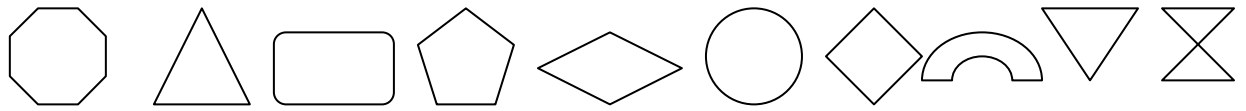
$$\begin{array}{r}
 \begin{array}{c} \text{arrow} \quad \text{concentric circles} \\ 98 \end{array} - \begin{array}{c} \text{square} \quad \text{arrow} \\ 29 \end{array} = \begin{array}{c} \text{oval} \quad \text{arrow} \\ 69 \end{array}
 \end{array}$$

$$\begin{array}{r}
 \begin{array}{c} \text{rectangle} \quad \text{arrow} \\ 19 \end{array} + \begin{array}{c} \text{rectangle} \quad \diamond \\ 14 \end{array} = \begin{array}{c} \text{circle} \quad \text{circle} \\ 33 \end{array}
 \end{array}$$

$$\begin{array}{r}
 \begin{array}{c} \text{concentric circles} \quad \text{concentric circles} \\ 88 \end{array} - \begin{array}{c} \text{oval} \quad \text{circle} \\ 63 \end{array} = \begin{array}{c} \text{square} \quad \text{triangle} \\ 25 \end{array}
 \end{array}$$

$$\begin{array}{r}
 \begin{array}{c} \text{square} \quad \text{square} \\ 22 \end{array} + \begin{array}{c} \text{triangle} \quad \text{triangle} \\ 55 \end{array} = \begin{array}{c} \text{parallelogram} \quad \text{parallelogram} \\ 77 \end{array}
 \end{array}$$

Löse das Rätsel der Malaufgaben



5

7

